

**1**

In what way(s) can this shape be classified?

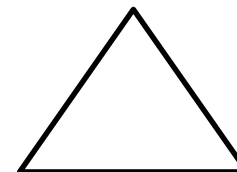


- a) Polygon
- b) Quadrilateral
- c) Parallelogram
- d) Rectangle

**5.G.3-4**

**2**

In what way(s) can this shape be classified?



- a) Scalene triangle
- b) Equilateral triangle
- c) Polygon
- d) Quadrilateral

**5.G.3-4**

**3**

In what way(s) can this shape be classified?

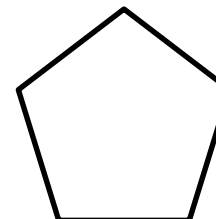


- a) Polygon
- b) Quadrilateral
- c) Trapezoid
- d) Rectangle

**5.G.3-4**

**4**

In what way(s) can this shape be classified?




- a) Polygon
- b) Quadrilateral
- c) Trapezoid
- d) Pentagon

**5.G.3-4**

**5**

In what way(s) can this shape be classified?

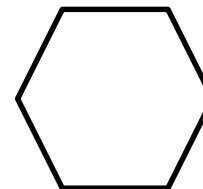


- a) Polygon
- b) Quadrilateral
- c) Rhombus
- d) Rectangle

**5.G.3-4**

**6**

In what way(s) can this shape be classified?

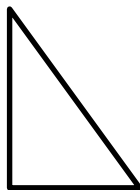


- a) Parallelogram
- b) Hexagon
- c) Polygon
- d) Octagon

**5.G.3-4**

**7**

In what way(s) can this shape be classified?



- a) Scalene triangle
- b) Polygon
- c) Right triangle
- d) Rectangle

**5.G.3-4**

**8**

In what way(s) can this shape be classified?

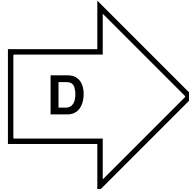
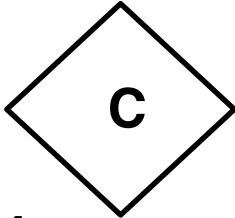
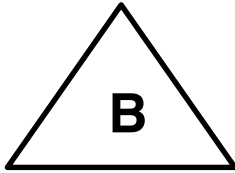



- a) Polygon
- b) Quadrilateral
- c) Parallelogram
- d) Rectangle

**5.G.3-4**

9

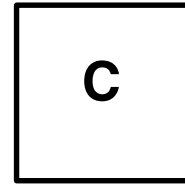
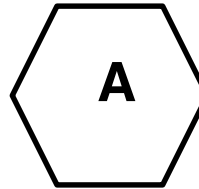
Identify the polygons.



5.G.3-4

10

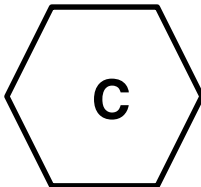
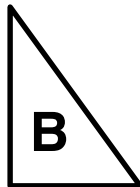
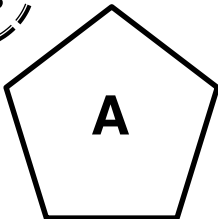
Identify the quadrilaterals.



5.G.3-4

11

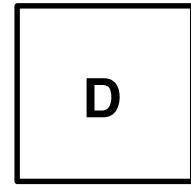
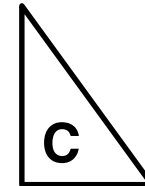
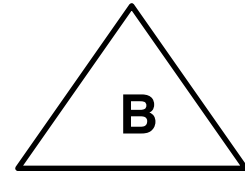
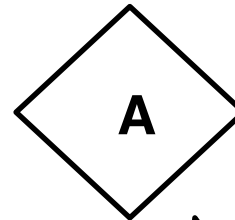
Identify the parallelogram(s).



5.G.3-4

12

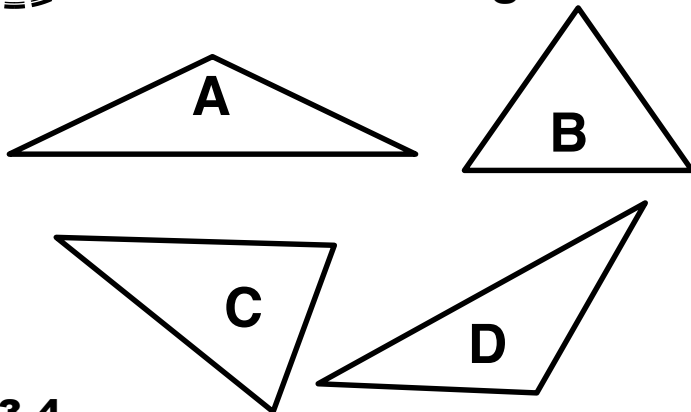
Identify the shapes with right angles.



5.G.3-4

**13**

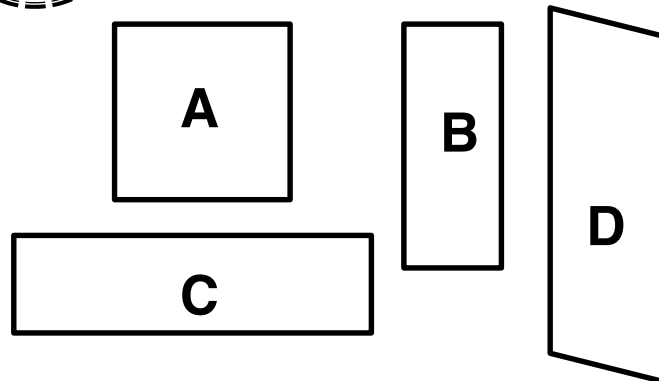
Identify the obtuse triangles.



5.G.3-4

**14**

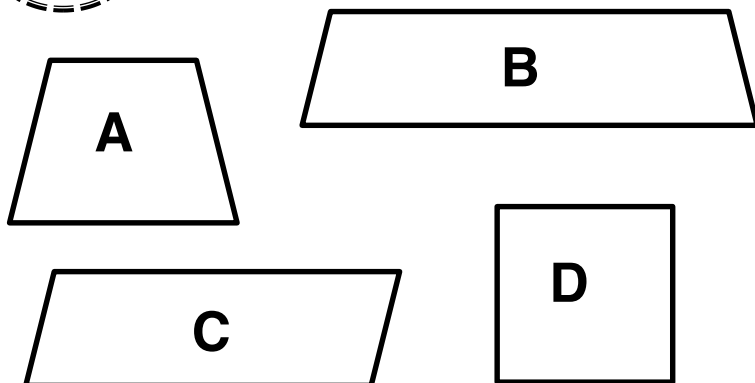
Identify the rectangles.



5.G.3-4

**15**

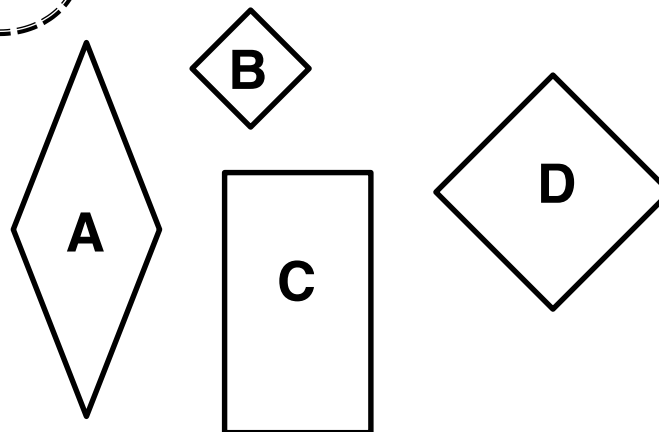
Identify the trapezoids.



5.G.3-4

**16**

Identify the rhombuses.



5.G.3-4

**17**

Answer each question with true or false, and then explain your answer.

All rhombuses are quadrilaterals.

**5.G.3-4**

**18**

Answer each question with true or false, and then explain your answer.

All rectangles are squares.

**5.G.3-4**

**19**

Answer each question with true or false, and then explain your answer.

All polygons have four sides.

**5.G.3-4**

**20**

Answer each question with true or false, and then explain your answer.

Rectangles have one pair of parallel sides.

**5.G.3-4**