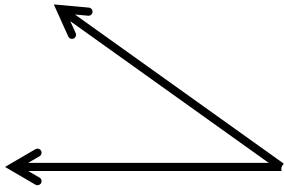


1

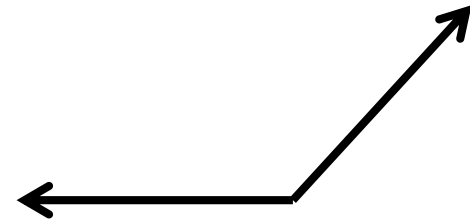
Label each angle as acute, obtuse, or right.



4.MD.5

2

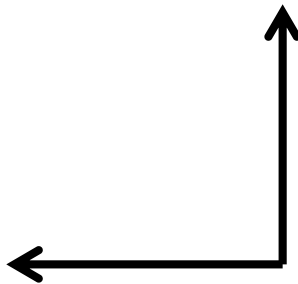
Label each angle as acute, obtuse, or right.



4.MD.5

3

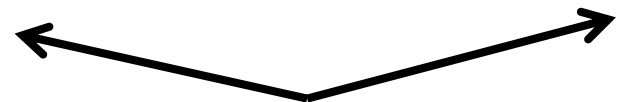
Label each angle as acute, obtuse, or right.



4.MD.5

4

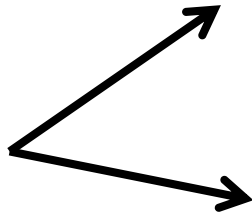
Label each angle as acute, obtuse, or right.



4.MD.5

5

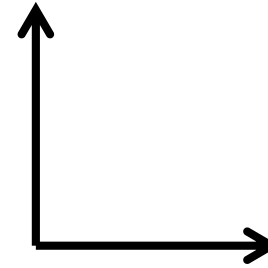
Label each angle as acute, obtuse, or right.



4.MD.5

6

Label each angle as acute, obtuse, or right.



4.MD.5

7


Label each angle as acute, obtuse, or right.



4.MD.5

8

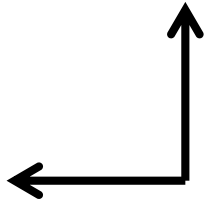
Label each angle as acute, obtuse, or right.



4.MD.5

9

Which choice best represents the angle?

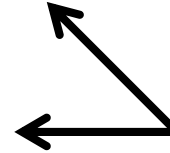


- a) 90°
- b) 120°
- c) 13°
- d) 42°

4.MD.5

10

Which choice best represents the angle?



- a) 168°
- b) 90°
- c) 45°
- d) 153°

4.MD.5

11

Which choice best represents the angle?

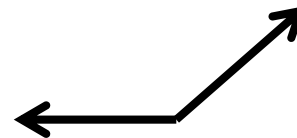


- a) 96°
- b) 25°
- c) 108°
- d) 124°

4.MD.5

12

Which choice best represents the angle?



- a) 135°
- b) 45°
- c) 105°
- d) 89°

4.MD.5

13

Which choice best represents the angle?

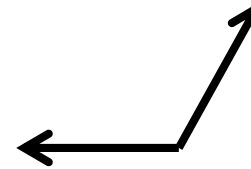


- a) 100°
- b) 180°
- c) 20°
- d) 165°

4.MD.5

14

Which choice best represents the angle?

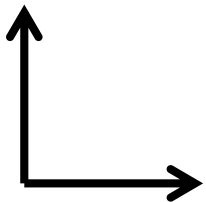


- a) 10°
- b) 100°
- c) 60°
- d) 45°

4.MD.5

15

Which choice best represents the angle?

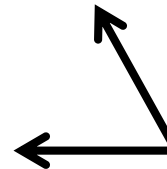


- a) 60°
- b) 15°
- c) 90°
- d) 145°

4.MD.5

16

Which choice best represents the angle?



- a) 70°
- b) 140°
- c) 90°
- d) 17°

4.MD.5

17

Determine if the angle is acute, obtuse, or right ?

165°

4.MD.5

18

Determine if the angle is acute, obtuse, or right ?

18°

4.MD.5

19

Determine if the angle is acute, obtuse, or right ?

90°

4.MD.5

20

Determine if the angle is acute, obtuse, or right ?

120°

4.MD.5