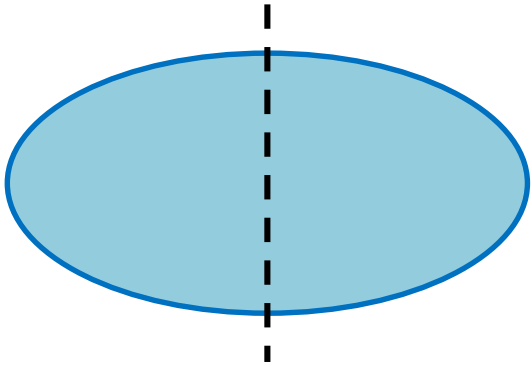


1

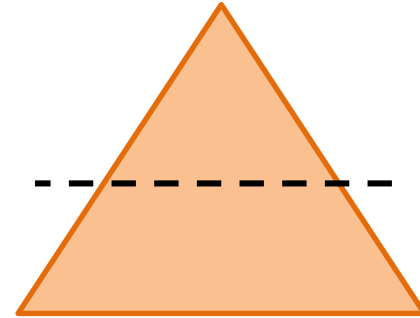
Is the dotted line a line of symmetry?



4.G.3

2

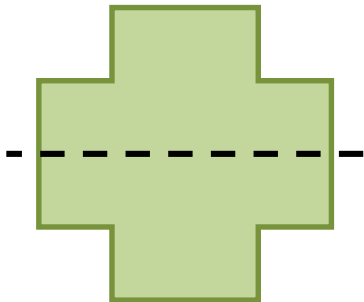
Is the dotted line a line of symmetry?



4.G.3

3

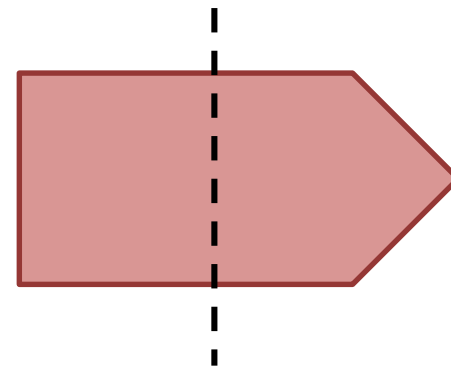
Is the dotted line a line of symmetry?



4.G.3

4

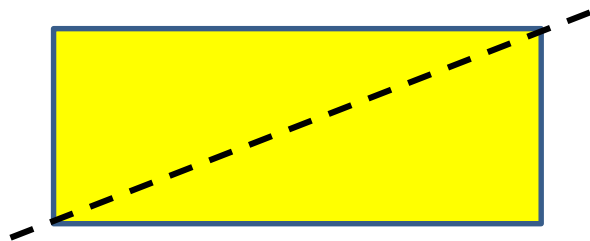
Is the dotted line a line of symmetry?



4.G.3

5

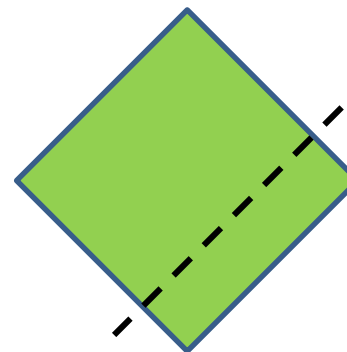
Is the dotted line a line of symmetry?



4.G.3

6


Is the dotted line a line of symmetry?



4.G.3

7

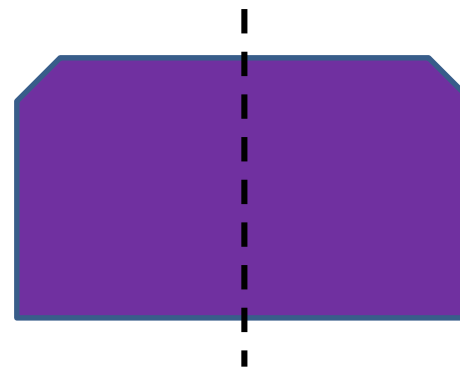
Is the dotted line a line of symmetry?



4.G.3

8

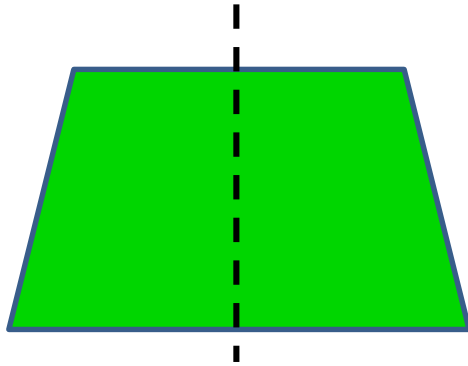
Is the dotted line a line of symmetry?



4.G.3

9

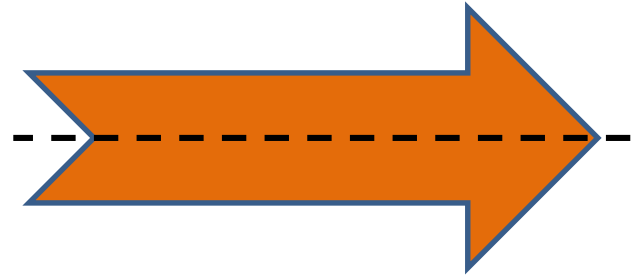
Is the dotted line a line of symmetry?



4.G.3

10

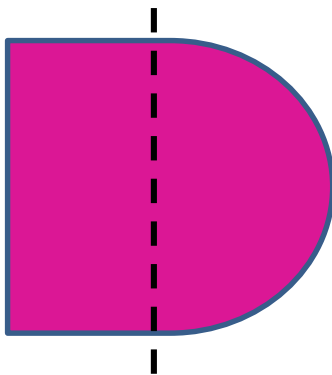
Is the dotted line a line of symmetry?



4.G.3

11


Is the dotted line a line of symmetry?



4.G.3

12

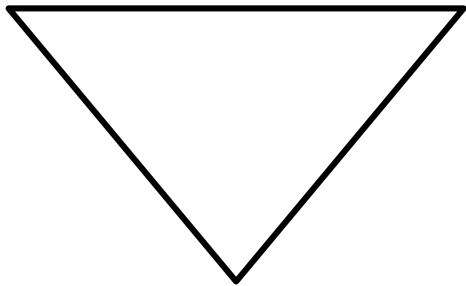
Is the dotted line a line of symmetry?



4.G.3

13

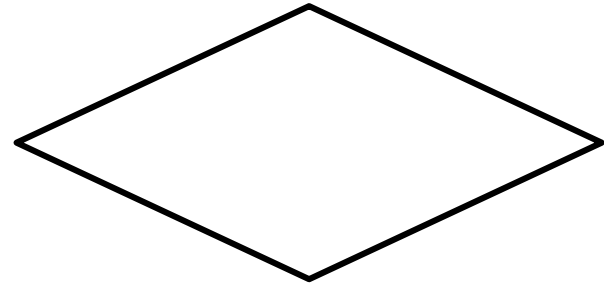
Using the recording sheet,
draw a line of symmetry
for this shape.



4.G.3

14

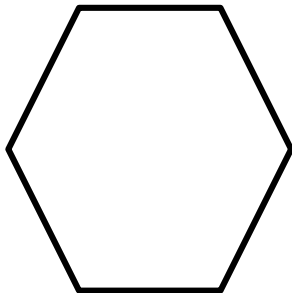
Using the recording sheet,
draw a line of symmetry
for this shape.



4.G.3

15


Using the recording sheet,
draw a line of symmetry
for this shape.



4.G.3

16

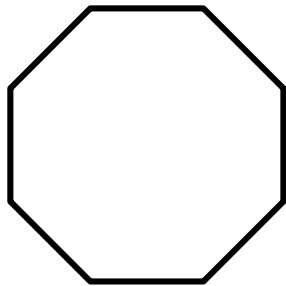
Using the recording sheet,
draw a line of symmetry
for this shape.



4.G.3

17

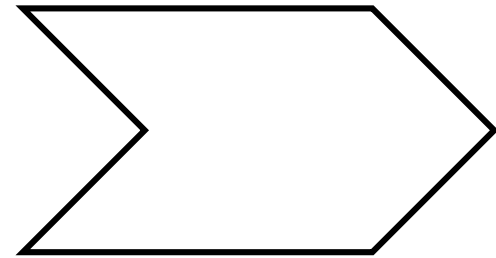
Using the recording sheet,
draw a line of symmetry
for this shape.



4.G.3

18

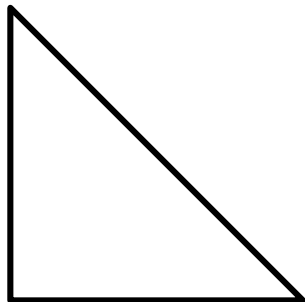
Using the recording sheet,
draw a line of symmetry
for this shape.



4.G.3

19


Using the recording sheet,
draw a line of symmetry
for this shape.



4.G.3

20

Using the recording sheet,
draw a line of symmetry
for this shape.



4.G.3