


1

Identify the shapes with perpendicular lines.


A)



B)



C)



D)



4.G.2

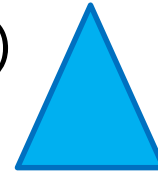
2

Identify the shapes with parallel lines.


A)




B)



C)



D)




4.G.2


3

Identify the shapes with obtuse angles.

A)



B)



C)



D)




4.G.2


4

Identify the shapes with right angles.

A)



B)



C)







D)



4.G.2

5





Identify the shapes with perpendicular lines.

- A)  B) 
- C)  D) 

4.G.2

6





Identify the shapes with parallel lines.

- A)  B) 
- C)  D) 

4.G.2

7





Identify the shapes with acute angles.

- A)  B) 
- C)  D) 

4.G.2

8


Identify the shapes with obtuse angles.

- A)  B) 
- C)  D) 

4.G.2

9

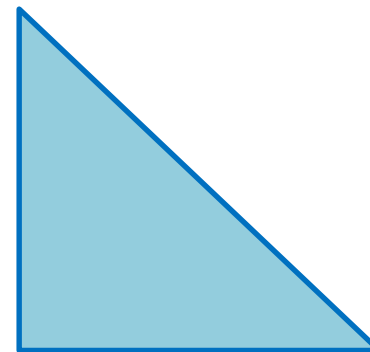
Is the triangle a right triangle?



4.G.2

10


Is the triangle a right triangle?



4.G.2

11


Is the triangle a right triangle?



4.G.2

12


Is the triangle a right triangle?



4.G.2

**13**


Is the triangle a right triangle?



**4.G.2**

**14**


Is the triangle a right triangle?



**4.G.2**

**15**

Is the triangle a right triangle?



**4.G.2**

**16**

Is the triangle a right triangle?



**4.G.2**

**17**

Draw a triangle with a right angle.

**4.G.2**

**18**

Draw a triangle without a right angle.

**4.G.2**

**19**

Draw a shape with an acute angle.

**4.G.2**

**20**

Draw a shape with an obtuse angle.

**4.G.2**